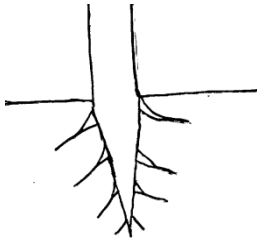


**MADINAH ISLAMIC JUNIOR SCH, NSANGI**  
**RECESS WORK TERM I 2020**  
**PRIMARY FOUR SCIENCE**

Name: \_\_\_\_\_

1. Name one natural source of light  
.....
2. Give any one part of flowering plant  
.....
3. Mention one example of domestic bird  
.....
4. What are living things?  
.....
5. Name the process by which plant roots absorb water and mineral salts from the soil  
.....
6. Identify any one type of soil  
.....
7. Give one way of keeping our bodies clean  
.....
8. Name the part of a plant that makes food  
.....
9. Mention any one item found in the first aid box  
.....
10. Identify the type of root system shown below



- \_\_\_\_\_
11. example of a flowering plant  
.....
  12. Give the main natural source of water in the environment  
.....
  13. Identify any one class of food  
.....
  14. Mention one use of water to man  
.....
  15. Name one type of a leaf  
.....
  16. Give the best soil for farming  
.....
  17. Identify the clouds that gives us rain  
.....
  18. What is a flower?  
.....
  19. Give one function of leaves to a plant

.....  
20. What is wind  
.....

21. Mention one use of roots to a plant  
.....

22. Name the body organ that animals use for seeing  
.....

23. In the space below draw and name one item used for cleaning our bodies



24. Identify one layer of soil  
.....

25. Who is a casualty?  
.....

26. Explain the term germination  
.....

27. Name the component of air that animals breathe out.  
.....

28. Give one example of seed eaten by animals  
.....

29. Where in the body of an insect are the legs and wings attached?  
.....

30. Name any one example of a fuel.  
.....

31. Name any one example of a vector  
.....

32. Give one sign of a dehydrated child  
.....

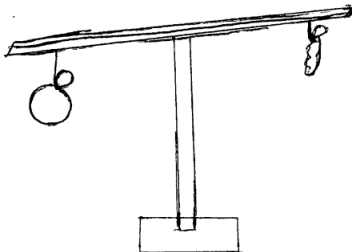
33. Explain the term sanitation  
.....

34. Mention one importance of wind to people  
.....

35. Give the reason why people eat food  
.....

36. How many stages of development does a cockroach undergo?  
.....

37. Identify the property of air shown below



38. Write one example of a plant with prop roots  
.....

39. Identify one type of leaf venation

40. Name the gas that plants use in the process of photosynthesis.

41. Where do we get water from?

## SECTION B

42. Match animals with their young ones

Cow piglet

Sheep calf

Goat lamp

Pig kid

I. Cow.....

II. Sheep.....

III. Goat.....

IV. Pig.....

43. What is germination?

b) Name two types of germination

i. .... ii. ....

c) Mention one condition necessary for germination to take place

44. Name the disease spread by the tsetse to

i. People.....

ii. Animals.....

b) Apart from tsetse flies, name any other two examples of vectors

i. .... ii. ....

45. Write down any two properties of air

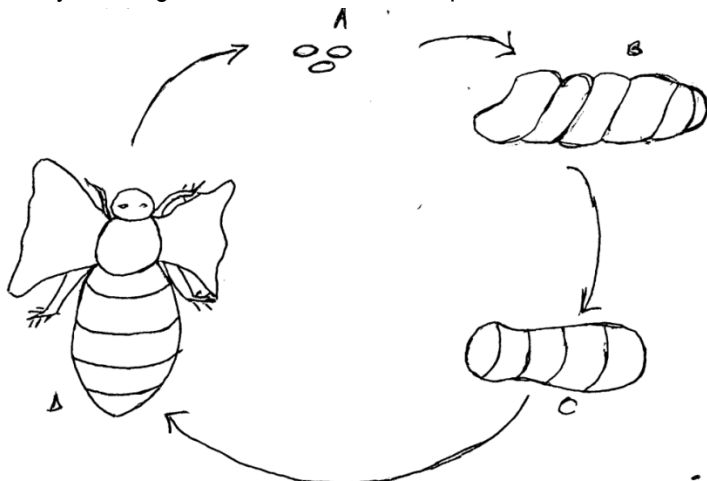
i) .....

ii) .....

b) Mention two components of air

i. .... ii. ....

46. Study the diagram below and answer questions that follow



a) How many stages has the insect above under go

b) Name the stages marked with letters

- A .....
- B.....
- C.....
- D.....

c) Write down three main parts of an insect

d) Give any one examples of an insect

47. Identify any two parts that make up the shoot system of a plant

- i. ....
- ii. ....

b) Mention two uses of plants to people

- i. ....
- ii. ....

48. Identify the three types of soil

- i. ....
- ii. ....
- iii. ....

b) Name any one layer of soil

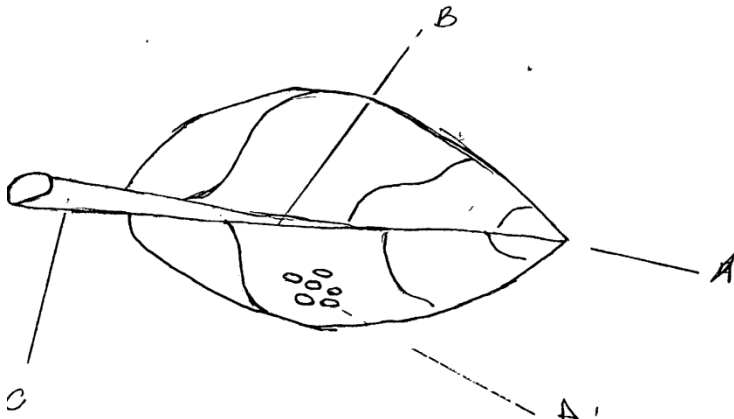
49. Mention two uses of water to man

- i. ....
- ii. ....

b) Identify two sources of water

- i. ....
- ii. ....

50. Below is a structure of a leaf. Use it to answer questions that follow



a) Name the parts marked with letters

- i. ....
- ii. ....
- iii. ....
- iv. ....

b) Give the function of part marked D

51. How are the following plants propagated?

- a) Banana .....
- b) Cassava.....
- c) Onions.....

b) What is plant propagation?

.....

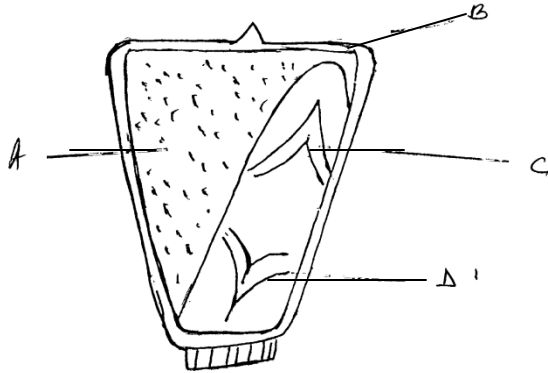
52. Identify the use of the following body organs

- a) Ears .....
- b) Brain.....
- c) Tongue.....
- d) Eyes.....

53. What are domestic animals

- .....
- b) Write down any two examples of domestic animals
- i. ....
  - ii. ....
- c) Why do animals move from one place to another
- .....

54. Use the diagram below to answer questions that follow



- b) Name the part labeled with letters
- i. A.....
  - ii. B.....
  - iii. C.....
  - iv. D.....
- c) What does part D develop into after fertilization?
- .....

55. Draw and name any four garden tools
